

FRIDAY TEST *Week 5*


1. The factors of 21 are

2. 25% of 300 =

3. Write one million, one thousand and one as a numeral.

4. $7555 \div 10 =$

5. $6 \times 7 = 42$



Show as a 90° turn anticlockwise.

7. What is the volume of a box 40 cm by 20 cm by 30 cm?

cm³

8. $35 \times \frac{3}{5} =$

9. What is the LCD of $\frac{3}{10}$ and $\frac{3}{4}$?

10. On your house plans a measurement of 15 m is indicated for a fence. If the scale is 1:100, how long should the line be on your plans?

cm

11. Halve $\frac{1}{2}$.

12. Octahedron = faces


13. The place value of 2 in 0.32

14. How many halves in 6?

15. Add brackets to this number sentence.


$$8 \times 3 - 45 \div 9 = 19$$

16. 16, 32, 64,

17.  How many B boxes will fit into Box A?

18. $5\frac{3}{10} - 7\frac{7}{10} =$

19. Name this shape.



20. 49 is a multiple of 7.

☐ true ☐ false

21. If the diameter of a circle is 28 cm, what is the radius?

cm

22. 9.1, 9.05, 9,


8.9, 8.85

23. A bus timetable shows 8-minute intervals between each stop. If a bus leaves the depot at 6.04 a.m. and has 3 stops, what time will it be at its final destination?

a.m.

24. $10^5 =$

25. Circle -3 on the number line.



MONDAY

1. The factors of 15 are:

, , and .


2. Write the numeral forty point five.

3. Circle the prime number.

21 **23** **25**

4. $\frac{6}{8} =$ %

5. This is the net of a



6. $10 - 0.08 =$

7. Add brackets to this number sentence.

$$6 \times 3 + 8 \div 2 = 22$$

8. $12.70 > 12.09$ ☐ true ☐ false

- 9.



Show this shape after a 180° turn.

10. Halve $\frac{1}{2}$.

11. $10^4 =$

12. A jar contains 10 blue, 4 red and 6 white jelly beans. What is the chance of picking a blue one?

in

13. On your house plans a measurement of 8 m is indicated for a kitchen window. If the scale is 1:100, how long should you draw the line?

14. Name this shape.



15. What is the place value of 2 in 0.02?

16. Is 532 divisible by 9?

17. What is the size of this angle?



18. Tick the largest ☐ $\frac{1}{2}$ ☐ $\frac{9}{12}$ ☐ $\frac{1}{3}$

19. 25% of 200 =

20. What is the volume of a box 50 cm by 30 cm by 20 cm?

TUESDAY

1. The factors of 16 are:

, , , and .

2. The time is 2 a.m. in the UK and 10 a.m. in China. What is the time difference?

3. If the diameter of a circle is 9 cm, what is its radius?

cm

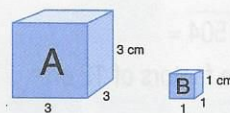
4. Share £160.00 with 8 people. £ each

5. $15\,500 + 7500 =$

6. $1 - 0.04 =$


7. Halve $\frac{1}{4}$.

8. How many B boxes fit into Box A?



9. Will a square and a rectangle tessellate together?

10. Circle -2 on the number line.



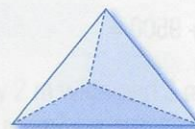
11. $7\frac{1}{10} - 8\frac{8}{10} =$

12. A tetrahedron has:


faces

edges

vertices



13. Name this shape.



14. What is the ratio of girls to boys if there are 15 girls to 3 boys?

15. $25 \times \frac{2}{5} =$

16. 25% of 300 =

17. 64 is a multiple of 9. ☐ true ☐ false

18. The LCD of $\frac{7}{10}$ and $\frac{3}{4}$ is .

19. 8.1, 8.05, 8, , 7.9, 7.85

20. How many halves in 5?

WEDNESDAY

1. The factors of 18 are:

and

2. Write the numeral six hundred and twenty point four.

3. Simplify $\frac{20}{24}$.

4. $10^5 =$

5. Circle the composite number.

29

30

31

6. Meaning of 9 in 0.09 is

7. $2000 - 350 =$

- 8.



Draw after a 270° turn anticlockwise.

9. $\frac{1}{3} =$ %

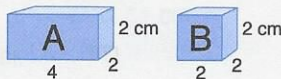
10. 25% of 500 =

11. An octahedron has faces.



12. How many B boxes would fit into Box A?

13. $5\frac{2}{10} - 7\frac{7}{10} =$



14. 17, 34, 68,

15. $82.95 \div 10 =$

16. A bus timetable shows 8-minute intervals between each stop. If a bus leaves its depot at 9.02 a.m. and has 4 stops, what time does it reach its destination?

17. Add brackets to this number sentence.

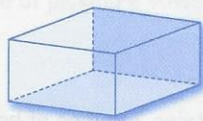
$$9 \times 3 - 18 \div 2 = 18$$

18. A cuboid has:

faces

edges

vertices



19. 64 is a multiple of 8. ☐ true ☐ false

20. Write one million, one thousand, one hundred and eleven as a numeral.

THURSDAY

1. The factors of 20 are:

and

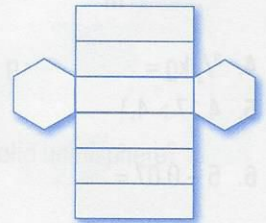
2. $4 \times b = 36$ so $b =$

- 3.

What is the size of this angle?

4. 25% of 800 =

5. This is the net of a



6. Simplify $\frac{18}{24}$.

7. $12 \times 9 =$

8. Is 621 divisible by 9? ☐ yes ☐ no

9. $9\overline{)342} =$

10. On a plan, how many centimetres should a wall be if its actual length is 12 m and the scale is 1:100?

cm

11. Tick the smallest ☐ $\frac{9}{10}$ ☐ $\frac{2}{5}$ ☐ $\frac{6}{10}$

12. Write five tenths as a decimal.

13. $4\frac{8}{10} + 7\frac{7}{10} =$

14. How many halves in 4?

15. Double $\frac{1}{4}$.

16. $2 - 0.09 =$

17. $81 \times \frac{1}{9} =$

18. Share £40.00 with 16 people. £ each

19. $71.69 \div 10 =$

20. A regular octagon has a perimeter of 40 cm. What is the length of one side?

cm

- Correct the spelling mistake. _____
I hardly reconise the house since it's been renovated.
- Circle the correct spelling. neusanse nuisance
- Correct the spelling mistake. _____
The house will be avaylable to rent for the holidays.
- Circle the correct spelling. perswaid persuade
- A synonym for **frequently** is:
☐ never ☐ often ☐ seldom
- Add a prefix to give each word the opposite meaning.
 _____respect _____qualify
- Write as a contraction.
 would have _____
- Write the homophone of **bored**. _____
- Separate **necessary** into its syllables. _____
- The plural of **radio** is _____.
- Add three types of punctuation mark.
Gary cried out Watch out Tom It's Lord Walbernort
- Add the apostrophe.
Lord Walbernort heard Garys screams.
- Add the commas.
Gary Tom Germaine and Hidreg stood still.
- Circle the common noun.
Slowly, Lord Walbernort approached the four friends.
- Circle the pronoun.
With a flash of magic, they were rescued on a flying carpet.
- Circle the adjectives.
The air was warm and comforting.
- Adverb or preposition? _____
The children arrived promptly at the school.
- Circle the definite article.
Walking up to school, the friends remained calm.
- Write the preposition. _____
Standing beneath the arch, they knew they were safe.
- Write the conjunction. _____
Feeling rather strange and very tired, they decided to go straight to bed.

21. Correct the spelling mistake. _____
Slugs can easily damidge your garden plants.
22. Circle the correct spelling. excllent excellent
23. Correct the spelling mistake. _____
I am defernate that I did not take your book.
24. Circle the correct spelling. hieght height
25. An antonym for **relaxed** is:
☐ difficult ☐ stressed ☐ strange
26. Add the suffix **ous** and write the adjective.
 fame _____ glory _____
27. Write **stairs** or **stares** in the sentence.
The new house still has no _____ in it.
28. Write a synonym for **sly**. c _____
29. In the dictionary, _____ comes before **surly**.
 surprise surge survive
30. Circle the word that does not have a silent letter.
 sword knight chest wrong
31. Add capital letters.
anna lived on the mountain with grandpa joel.
32. Add the missing comma.
Every spring Anna took the goats to the high pasture.
33. Circle the simile.
Anna felt as safe as houses living with her grandpa.
34. Circle the proper nouns.
Anna and Joel cared for Peter during the storm.
35. Tick. ☐ adjective ☐ abstract noun
For Peter, it was a true delight to look after the village goats.
36. Proper noun or proper adjective? _____
Life in the Swiss Alps was wonderful for Anna.
37. Circle the verb group.
Grandpa had lived in the Alps for many years.
38. Circle and write the preposition. _____
One day, Joel's sister came to take Anna to the city.
39. **too** or **to**?
Anna did not want _____ leave with her great-aunt.
40. Write the conjunction. _____
She left her beloved mountains and lived in a grey city.