

FRIDAY TEST *Week 2*

1. Write the numeral
twenty five point two.


2. Round 8.57 to one
decimal place.

3. The area of an oblong
field 100 m by 40 m =
m²

4. Name this shape.



5. Circle -3 on the
number line.



6. This is the net of a



7. What would be the
diameter of a circle if
its radius is 5 cm?

cm

8. $(8 \times 4) - 2 =$

9. The time is 7 a.m. in
the UK and 9 a.m. in
South Africa. What is
the time difference?

10. $80 + b = 50 \times 3$

so $b =$


11. 250, 500, ,
1000

12. Write the composite
number that comes
after 17.

13. 40% of £60.00 =

£

14.



Draw a 270° turn
anticlockwise.

15. Round 7.6.
(Nearest whole number)

16. Perimeter of a regular
pentagon with 7 cm
sides =

cm

17. What is the LCD
for $\frac{3}{4}$ and $\frac{1}{2}$?

18. The meaning of 4 in
411 200?

19. Simplify $\frac{12}{15}$.

20. Name this shape.



21. Name this shape.



22. $7 - 0.3 =$


23. If there are £0.60 to
€1.00, how many
euro would you get for
£6.00?

24. If a lolly jar contains
20 lollies in total, 4
red, 10 yellow and 6
orange, what chance
have you of picking a
red lolly?

in

25. What is the place
value of 6 in 617 000?


MONDAY

- Write the numeral sixty two point five.
- What is the radius of a circle with a 10-cm diameter?
_____ cm
- Name this shape.
_____ 
- Round 7.53 to one decimal place.
- What is the place value of 9 in 962 000?

- $90 + b = 2 \times 70$ so $b =$ _____
- Write one million, one hundred and one thousand as a numeral.




- $18.5 \div 10 =$ _____
- If a clock shows 6 o'clock, what is the size of the angle created by the hands?
☐ 90° ☐ 45° ☐ 60° ☐ 180°
- Simplify $10/15$.
- Circle -5 on the number line.

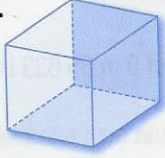


- $7 - 0.9 =$ _____
- This is the net of a
_____ 
- 30% of £50.00 = £ _____
- Is 3.7 rounded to 3 or 4?

- $(6 \times 5) - 20 =$ _____
- A regular pentagon has 7-cm sides. What is its perimeter?
_____ cm
- $10 \times 2/5 =$ _____
- $4.04 > 4.20$ ☐ true ☐ false
- The time is 5 p.m. in the UK and 7 p.m. in Egypt. What is the time difference?

TUESDAY

- Write the numeral thirty one point eight.
- 
Draw a 270° turn clockwise.
- Is 715 divisible by 5?
- $(9 \times 5) \div (30 \div 6) =$ _____
- 15, 30, 45, _____, and _____
- Write the prime numbers from 11 to 20.
_____, _____, _____, and _____
- $2^4 = 2 \times 2 \times 2 \times 2 =$ _____
- $3/4 + 2/4 + 3/4 =$ _____
- Name this shape.
_____ 
- What is the radius of a circle if its diameter is 3 m?
_____ m
- $200 \div 5 =$ _____
- Simplify $12/18$.
- What would be the area of an oblong field 100 m by 8 m?
_____ m^2
- Name this shape.
_____ 
- $8 \times 3/4 =$ _____
- If there are £0.60 to €1.00, how many euro would you get for £3.00?

- $23.5 \div 10 =$ _____
- A cube has:
_____ faces
_____ edges
_____ vertices

- $1/10 =$ _____ %
- Round 8.6. _____

WEDNESDAY

- Write the numeral twenty point seven.
- $41.3 \div 10 =$
- Write one million, one hundred and one as a numeral.
- $80 + b = 60 \times 2$ so $b =$
- If a clock shows 9 o'clock, what is the size of the angle?
☐ 90° ☐ 45° ☐ 60°
- $6.05 < 6.60$ ☐ true ☐ false
- What is the radius of a circle if its diameter is 4 cm?
 cm
- Round 5.86 to one decimal place.
- What is the meaning of 4 in 417 200?
- The circumference of a circle is approximately how many times longer than the diameter?
- 40% of £80 = £
- Tick the largest ☐ $\frac{1}{10}$ ☐ $\frac{3}{5}$ ☐ $\frac{4}{10}$
- $9 - 0.9 =$
- $6 \overline{)126} =$
- 25, 50, , 100
- $\frac{3}{4} =$ %
- Round 8.13. Is it 8.1 or 8.2?
- What is the LCD for $\frac{2}{8}$ and $\frac{1}{2}$?
- A regular hexagon has 9-cm sides. What is its perimeter? cm
- $4^3 = 4 \times 4 \times 4 =$

THURSDAY

- Write the numeral eighty six point three.
- If there are £0.60 to €1.00, how many euro would you get for £6.00?


- Name this shape.



- Write the composite numbers from 11 to 20.


- The LCD for $\frac{3}{4}$ and $\frac{2}{3}$ is

- Circle +4 on the number line.



- $(8 \times 4) \div (16 \div 4) =$

- This is the net of a



- $\frac{8}{10} - \frac{3}{10} =$


- $(36 \div 3) + 3 =$

- The time is 6.00 a.m. in the UK and 9 a.m. in Kenya. What is the time difference?

- Simplify $\frac{12}{16}$.

- $6^2 =$

- Draw a 180° turn.



- Tick the smallest ☐ $\frac{2}{3}$ ☐ $\frac{3}{9}$ ☐ $\frac{4}{6}$

- What is the chance of picking a blue pen if your pencil case had 4 red and 6 blue pens?

- The factors of 4 are and

- Round 5.27. Is it 5.2 or 5.3?

- 60% of £50 = £

- A decagon has sides.