

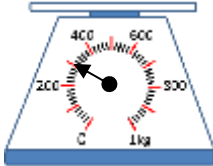


Name

Date



MENTAL MATHS SHEET 3:A9

1)	$12 - \underline{\quad} = 5$	
2)	Write down five hundred and seven.	
3)	What fraction is shaded? 	
4)	Round 28 to the nearest 10.	
5)	What is the next number? 77, 74, 71, 68, 65, 62, <u> </u>	
6)	How many months in 2 years?	
7)	$57 + \underline{\quad} = 62$	
8)	How many TENS make £1.20?	
9)	Shade $\frac{3}{5}$ of the rectangle. 	
10)	A microwave which costs £400 is put in a half-price sale. How much does it cost in the sale?	
11)	Frazer has 15 sweets which he shares between his 5 friends. How many do they each get?	
12)	How many grams? 	
13)	I have £20. I spend £14. How much do I have left?	
14)	The time is 2:15pm. What was the time 10 minutes ago?	
15)	Which of these numbers is a multiple of 5? 37 13 40 8	
16)	$400 + 3 + 60$	



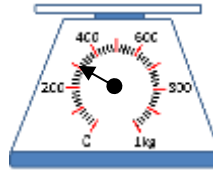


Name

Date



MENTAL MATHS SHEET 3:A9 ANSWERS

1)	$12 - \underline{\quad} = 5$	7
2)	Write down five hundred and seven.	507
3)	What fraction is shaded? 	$\frac{1}{3}$
4)	Round 28 to the nearest 10.	30
5)	What is the next number? 77, 74, 71, 68, 65, 62, <u> </u>	59
6)	How many months in 2 years?	24
7)	$57 + \underline{\quad} = 62$	5
8)	How many TENS make £1.20?	12
9)	Shade $\frac{3}{5}$ of the rectangle. 	
10)	A microwave which costs £400 is put in a half-price sale. How much does it cost in the sale?	£200
11)	Frazer has 15 sweets which he shares between his 5 friends. How many do they each get?	3
12)	How many grams? 	300g
13)	I have £20. I spend £14. How much do I have left?	£6
14)	The time is 2:15pm. What was the time 10 minutes ago?	2:05pm
15)	Which of these numbers is a multiple of 5? 37 13 40 8	40
16)	$400 + 3 + 60$	463

