
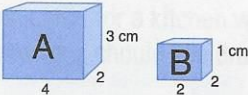
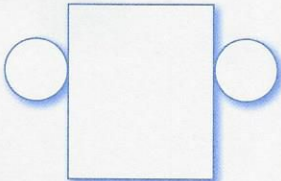

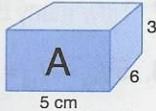



# MONDAY

- The square root of 4 is .
- Write these decimals from smallest to largest.  
0.5      0.75      0.05
- Your house plans are drawn using 1:100 as the scale. Measure this line and indicate the actual length in metres.  
 m 
- $\frac{3}{4}$  kg =  g
- $4.17 > 4.1$  ☐ true ☐ false
- $5 - 0.07 =$
- What is the area of a floor 8 m by 6 m?  m<sup>2</sup>
- What is the angle between the hands of a clock that shows 9 o'clock?  
☐ 45° ☐ 90° ☐ 9°
- Halve  $\frac{1}{4}$ .
- Circle the prime number.  
27      28      29
- Write one million, five hundred and fifty thousand as a numeral.
-   
How many B boxes will fit into Box A?
- The factors of 22 are: , ,  and
- Write the numeral seven hundred and eighty point one.
- $(15 - 9) \times (9 \div 3) =$
- $2^5 =$
- $\frac{2}{3} =$   %
- Write half past one in the morning as 24-hour time.  hours
- 0.5, 5, , 500, 5000
- This is the net of a .  


# TUESDAY

- The square root of 36 is .
- How many thirds in 2?
- 75% of 100 =
- The angles in a square are all how many degrees?  
°
- $6^2 =$
- Double 0.7.
- Name this shape. 
- What is the ratio of boys to girls if a class has 10 boys and 20 girls?
- Round 7.07 to the nearest tenth.
- $b \times 12 = 108$  so  $b =$
- Write these fractions from largest to smallest.  
 $\frac{7}{8}$        $\frac{1}{4}$        $\frac{3}{6}$
- $8\frac{4}{8} + 2\frac{2}{8} =$
- What is the volume of this block?  
 cm<sup>3</sup> 
- The time is 1 p.m. in the UK and 8 p.m. in Thailand. What is the time difference?
- Circle -5 on the number line.  

- Is 433 divisible by 3? ☐ yes ☐ no
- Will a pentagon and a square tessellate together?
- $80 \times 50 =$
- $47.5 \div 10 =$
- A hat contains 7 names of boys and 8 names of girls. What is the chance of picking a girl's name?  
 in



- The square root of 9 is .
- A floor is 7 m by 4 m. Area =  $\text{m}^2$
- Write these decimals from largest to smallest.

0.22

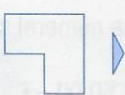
0.2

0.02

- 75% of 200 =
- What is the ratio of girls to boys if a class has 20 girls and 10 boys?
- Round 29.35 to the nearest whole number.

- Simplify  $\frac{21}{24}$ .

- Draw a  $90^\circ$  turn clockwise.



- $3^3 =$

- $\frac{1}{2}$  kg = g

- Write six hundredths as a decimal.

- Name this 3-D shape.



- What is the radius of a circular lid with a 12 cm diameter? cm

- Circle the composite number.

26

29

31

- $8\frac{1}{3} - 2\frac{2}{3} =$

- The angles in an equilateral triangle are all  $^\circ$ .

- How many faces on a cube?

- $\frac{1}{5} =$  %

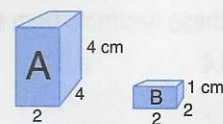
- $(16 - 7) - (12 \div 4) =$

- What is the chance of picking a vowel from the alphabet?

in

- The square root of 49 is .

- How many B boxes fit into Box A?



- How many thirds in 3?

- The angles in a rectangle are all how many degrees?

- 300, 30, 3,

- $300 \div c = 60$

c =

- How many surfaces on a solid hemisphere?

- $7 \overline{)357} =$

- Simplify  $\frac{30}{36}$ .

- Write these fractions from largest to smallest.

$\frac{2}{5}$

$\frac{1}{10}$


$\frac{1}{2}$

- A square-based pyramid has:

faces

edges

vertices



- Write nine hundredths as a decimal.

- $8.00 > 8.08$

☐ true ☐ false

- How many degrees?

$^\circ$



- 82 is a multiple of 2.

☐ true ☐ false

- $2 - 0.01 =$

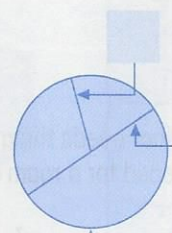
- 75% of 500 =

On the circle diagram label:

- The *radius* 'A'.

- The *diameter* 'B'.

- The *circumference* 'C'.



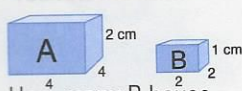


# FRIDAY TEST *Week 6*

- The square root of 16 is
- Write these decimals from smallest to largest.

0.5    0.75    0.05

- What is the ratio of boys to girls if there are 12 boys and 24 girls?

- 

How many B boxes will fit into Box A?

5.  $\frac{1}{4}$  kg = g

6.  $c \times 12 = 132$

so  $c =$

- What is the area of a floor 7 m by 6 m?

m<sup>2</sup>

8.  $9 - 0.01 =$

- How many surfaces on a hemisphere?

- How many thirds in 4?

11.  $7 \overline{)427} =$

- Write twelve forty in the morning in 24-hour time.

hours

13.  $7.07 > 7.70$

☐ true ☐ false

- Write these fractions from largest to smallest.

$\frac{1}{2}$      $\frac{8}{10}$      $\frac{2}{5}$


- Double 0.8.

- The angles in a rectangle are all how many degrees?

- Round 32.83 to the nearest tenth.

18.  $38.5 \div 10 =$

- Your house plans are drawn using 1:100 as the scale. Measure this line and indicate the actual length in metres.



20.  $\frac{2}{5} =$  %

- Name this shape.



22.  $\frac{7^6}{8} + \frac{2^4}{8} =$

- This is the net of a



24. 75% of 500 =

- A jar contains 3 chocolate chip, 12 coconut and 5 ginger biscuits. Without looking, what is the probability of choosing a ginger biscuit?

in



1. Correct the spelling mistake. \_\_\_\_\_  
*To acheive a good result, you must work hard.*
2. Circle the correct spelling.    enuff    enough
3. Correct the spelling mistake. \_\_\_\_\_  
*I am certin I locked the door this morning.*
4. Circle the correct spelling.    learn    lurn
5. A synonym for **erase** is:  
☐ hide    ☐ delete    ☐ capture
6. Add the prefix **in** or **il** to give the opposite meaning.  
\_\_\_\_\_ legible    \_\_\_\_\_ adequate
7. Write as a contraction.  
will not \_\_\_\_\_
8. Write the correct homophone. \_\_\_\_\_  
*It was a long walk for the bride and her father to the altar/alter.*
9. Separate **desperate** into its syllables. \_\_\_\_\_
10. The singular of **diaries** is \_\_\_\_\_.
11. Add a comma to give the sentence sense.  
*Although Dad could eat the problem still bothered him.*
12. Add a comma.  
*Because he needs a lot of work done Dad has to visit the dentist.*
13. Add commas to the list.  
*Dad's other problems include: a bad back sore knees rickety hips ingrown toenails and bunions.*
14. Write the common noun. \_\_\_\_\_  
*The race starts at the beginning of July.*
15. Circle the proper adjective.  
*This famous annual race is challenging and was won by a Scottish driver.*
16. Circle the proper nouns.  
*The annual race around France always ends in Paris.*
17. Write the comparative adjective. \_\_\_\_\_  
*The race in France is longer than the one in Italy.*
18. Write the superlative adjective. \_\_\_\_\_  
*Of the three races, in Italy, France and Spain, the one in France is the most famous.*
19. Circle the word that does not belong.  
*My dream holiday would be to follow the French race there.*
20. Write the pronouns. \_\_\_\_\_  
*We all have dream holidays—what's yours?*
21. Correct the spelling mistake. \_\_\_\_\_  
*Tennis is the most populur sport in our class.*
22. Circle the correct spelling.    favourite    favrit
23. Correct the spelling mistake. \_\_\_\_\_  
*My dad will be fourty next year.*
24. Circle the correct spelling.    disastrus    disastrous
25. An antonym for **deny** is:  
☐ truth    ☐ believe    ☐ admit
26. Write the adjective made when the suffix **ous** is added to the nouns.  
mountain \_\_\_\_\_    ridicule \_\_\_\_\_
27. Write **expand** or **contract**.  
*If things shrink and shorten, we say they \_\_\_\_\_.*
28. Write a synonym for **enemy**.    f \_\_\_\_\_
29. In the dictionary, \_\_\_\_\_ precedes **paradise**.  
parallel    paralysed    parachute
30. In which word is the letter **k** silent?  
☐ duck    ☐ khaki    ☐ knowledge
31. Add an apostrophe.  
*Jans visits to the library became less frequent.*
32. Complete the simile.  
*as neat as a \_\_\_\_\_*
33. Add an apostrophe.  
*The womens changing room is next to the stairs.*
34. Another verb for **said**. \_\_\_\_\_  
*The man said, 'The show is about to begin.'*
35. Write the missing word.  
*a \_\_\_\_\_ of lions*
36. Circle the verb group.  
*I would prefer to relax in the sunshine.*
37. Circle the adverb.  
*We won't walk quickly, so you'll be able to keep up.*
38. Write the adverb that tells **when**. \_\_\_\_\_  
*I saw this programme before.*
39. Circle the preposition.  
*We'll walk to the old bridge.*
40. Write the conjunction. \_\_\_\_\_  
*When you are fitter, we'll be able to walk further.*



# Imagery

Imagery

Each sentence contains a metaphor, a simile or personification. Write down which technique is being used for each sentence. For example:

Susan was a monkey as she clambered up the tree. metaphor

1. The sun smiled down on the holiday-makers basking below. \_\_\_\_\_
2. His teacher was a bitter man; he had a heart of pure ice. \_\_\_\_\_
3. John's grandfather was a wise, old owl perched in his chair. \_\_\_\_\_
4. The newspapers' headlines screamed "Robbery!" \_\_\_\_\_
5. The angry man stomped across the room like an elephant. \_\_\_\_\_
6. The footballer was a streak of lightning as he raced to the goal. \_\_\_\_\_
7. The moonlight danced on the waves, causing the spray to shimmer. \_\_\_\_\_
8. The snow was a soft, white blanket covering the town. \_\_\_\_\_
9. The Christmas lights were as bright as diamonds. \_\_\_\_\_

**Hint:** Similes often use the word 'like' or 'as'.

/ 9

Imagery

Complete these similes and metaphors using a suitable word or phrase. For example:

The lorry was as slow as a snail.

10. The hot room was a \_\_\_\_\_.
11. Her face was as red as a \_\_\_\_\_.
12. The graceful dancer was a \_\_\_\_\_.
13. His father shouted as loudly as a \_\_\_\_\_.
14. Mr Ngema ran along the road like a \_\_\_\_\_.
15. His knowledge was as valuable as \_\_\_\_\_.
16. The soldier moved as quickly as a \_\_\_\_\_.
17. The forest was as dark as \_\_\_\_\_.
18. Her fat uncle was a \_\_\_\_\_.

**Hint:** Use your imagination for these questions but make sure that what you write makes sense.

/ 9



## Alliteration and Onomatopoeia

### Alliteration

Underline all of the words that form the alliteration. For example:

The baby beamed at the big blue balloon.

1. The giant jumped as the giraffe's jaws grasped the branches.
2. Phil fanned the flames furiously as he fought to phone the firemen.
3. The king crept behind the dusty curtains, which caused him to choke.
4. The pony pranced while the phantom played a prank.
5. Hannah hoped that Henry would not be home an hour late.
6. Nigel knew that he had nearly knocked over the new fence.
7. Wendy watched the writers while they tried on wacky wigs.
8. The gnome graciously guarded the grand and glorious garden.
9. The robber raided the wrong room before he was wrestled to the ground.

**Hint:** Look out for the same sounds at the beginning of words, not just the same letter.


/ 9

### Onomatopoeia

Underline the onomatopoeic word in each sentence. For example:

The sausages were slowly sizzling in the pan as I threw the egg away.

10. Veronica screamed in fright when the leaves began to rustle.
11. Hissing, the wild cat spun around to inspect its quivering prey.
12. The door banged shut as Achmed stormed out of the room.
13. Fatima heard her brother's wheezing cough echo through the house.
14. I cheered loudly and my friend tooted the horn as his car's engine burst into life.
15. The bicycle whizzed past Alexander at top speed.
16. The lemonade fizzed gently as Sam poured it into the guests' glasses.
17. I yelped when my brother stood on my toe — it made my foot tingle.
18. The boy loved to sit by the crackling fire and watch the flames leap over the logs.



**Hint:** Look for words that imitate the sound of the action or object.

/ 9